


# Symmetry

Find out how many lines of symmetry each of the follow shapes have.



I have 4 lines of symmetry.




I have 5 lines of symmetry.




I have 2 lines of symmetry.



I have 1 line of symmetry.



I have 1 line of symmetry.



I have 3 lines of symmetry.